



Le decine e le unità



OSSERVA ATTENTAMENTE:

3



la **cifra 3** indica **tre unità**

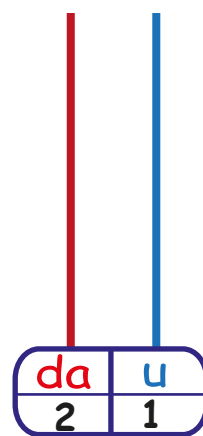
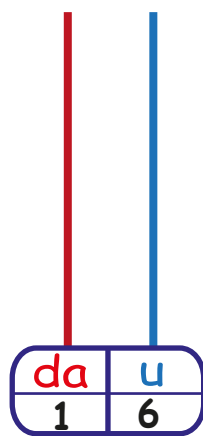
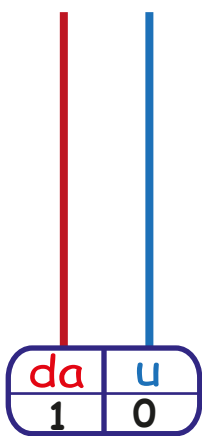
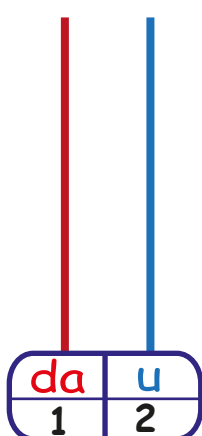
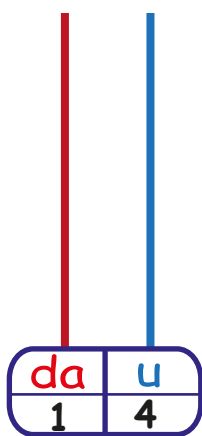
30



la **cifra 3** indica **tre decine**
cioè **tre gruppi da 10**



Rappresenta sugli abachi i numeri indicati



Scomponi i numeri, come nell'esempio

17 → 1da 7u

9 →

18 →

4 →

13 →

10 →

7 →

20 →

11 →



Componi i numeri, come nell'esempio

1da 6u → 16

1da 7u →

1da 4u →

8u →

2da 0u →

1da 8u →

1da 0u →

5u →

2da 1u →