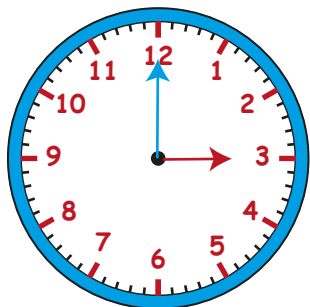
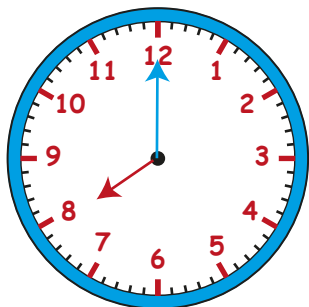


SCRIVI LE ORE INDICATE DALLE LANCETTE

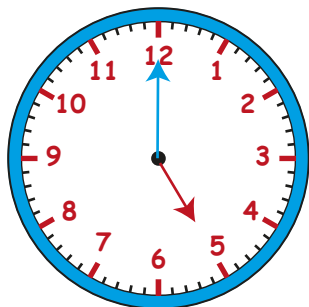
Ricorda che la lancetta rossa indica le ore e quella blu i minuti



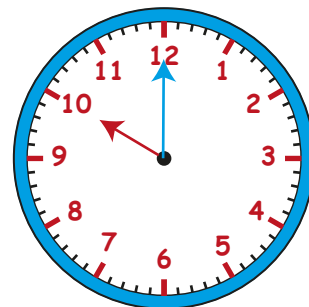
Antimeridiane: ___ : ___
Pomeridiane: ___ : ___



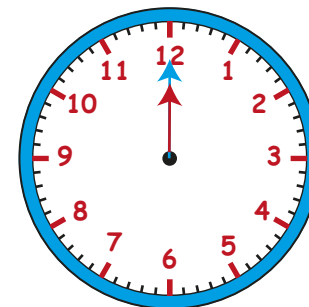
Antimeridiane: ___ : ___
Pomeridiane: ___ : ___



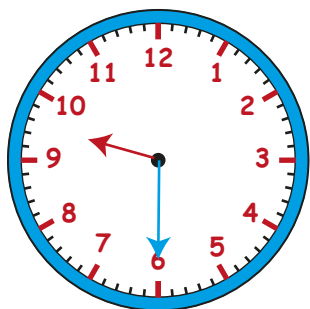
Antimeridiane: ___ : ___
Pomeridiane: ___ : ___



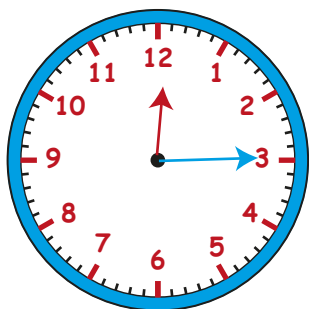
Antimeridiane: ___ : ___
Pomeridiane: ___ : ___



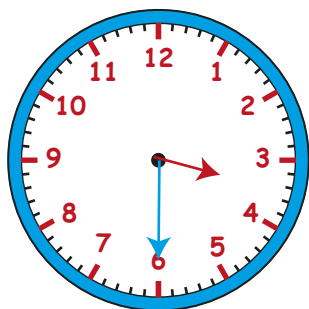
Antimeridiane: ___ : ___
Pomeridiane: ___ : ___



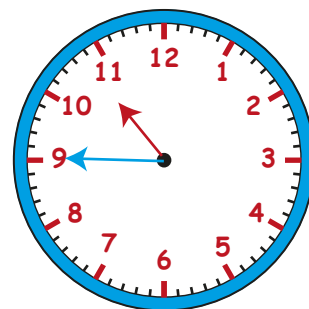
Antimeridiane: ___ : ___
Pomeridiane: ___ : ___



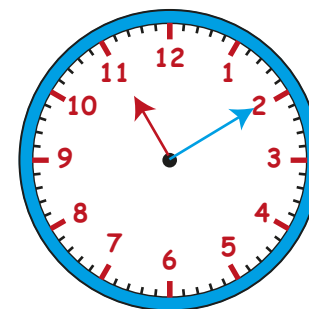
Antimeridiane: ___ : ___
Pomeridiane: ___ : ___



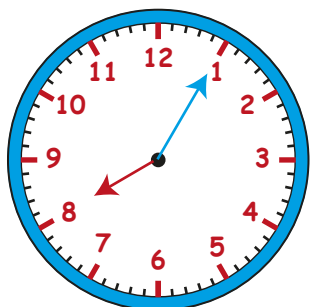
Antimeridiane: ___ : ___
Pomeridiane: ___ : ___



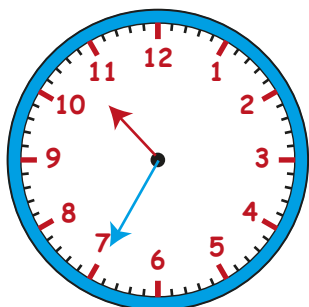
Antimeridiane: ___ : ___
Pomeridiane: ___ : ___



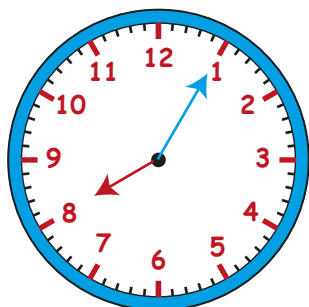
Antimeridiane: ___ : ___
Pomeridiane: ___ : ___



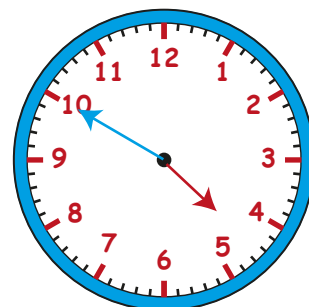
Antimeridiane: ___ : ___
Pomeridiane: ___ : ___



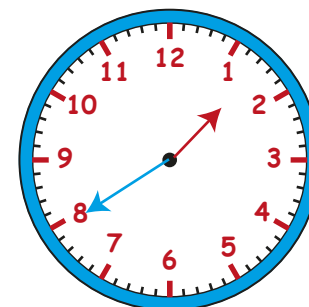
Antimeridiane: ___ : ___
Pomeridiane: ___ : ___



Antimeridiane: ___ : ___
Pomeridiane: ___ : ___



Antimeridiane: ___ : ___
Pomeridiane: ___ : ___



Antimeridiane: ___ : ___
Pomeridiane: ___ : ___